


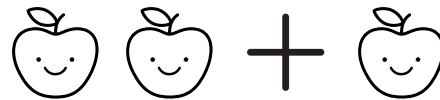
Name: _____

Apple Additions

Directions: Add the apples and write the number in the box.



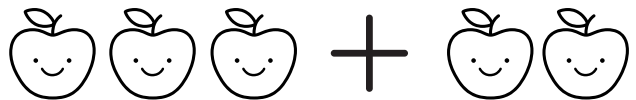
$$1 + 4 = \square$$




$$2 + 1 = \square$$




$$1 + 1 = \square$$




$$3 + 2 = \square$$




$$6 + 2 = \square$$



$$4 + 2 = \square$$



$$7 + 3 = \square$$




$$2 + 3 = \square$$


Name: _____

Apple Additions


Directions: Add the apples and write the number in the box.




$$5 + 5 = \square$$




$$3 + 5 = \square$$




$$2 + 7 = \square$$




$$3 + 4 = \square$$




$$6 + 5 = \square$$



$$6 + 3 = \square$$



$$7 + 3 = \square$$



$$6 + 6 = \square$$